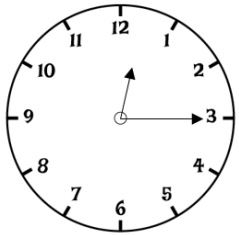


# Year 4

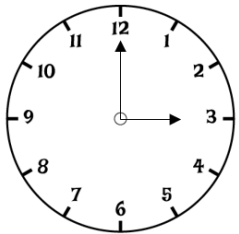
## Time

Name \_\_\_\_\_

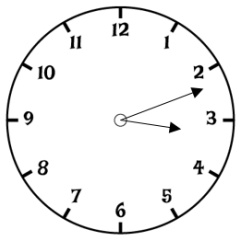
1 Match the analogue and digital clocks that show the same time.



15 : 00



12 : 15



03 : 12



2 marks

2 Complete the table.

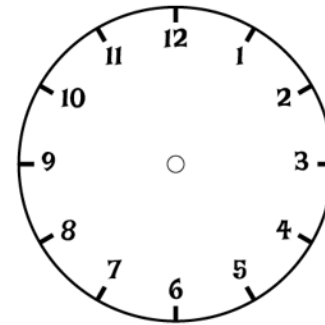
Month	Number of Days
March	
November	
	28 or 29



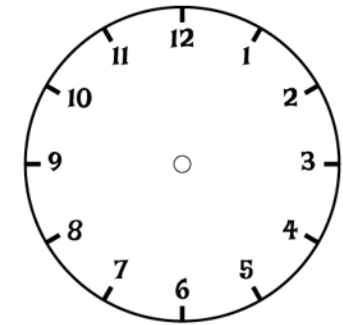
3 marks

3 Jack sets off to the shop at twenty past nine. He arrives at the shop 35 minutes later.

Draw the times on the clock faces.



Sets off



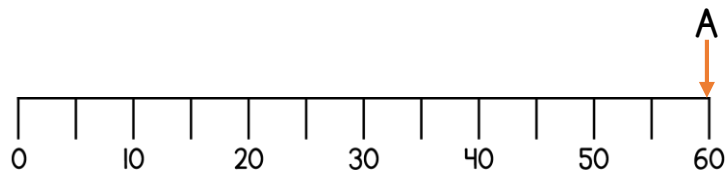
Arrives



2 marks

- 4 Draw arrows to match the statements to the correct position on the number line. One has been done for you.

A	B	C	D
Seconds in a minute	Minutes in half an hour	Hours in a day	Months in a year



- 5 Circle the times that match the time shown on the digital clock.

17 : 45

quarter to six  
in the evening

5:45 p.m.

5:45 a.m.

7:45 p.m.

3 marks

2 marks

- 6 A machine makes one gadget every 20 seconds.  
How many gadgets does it make in 5 minutes?

\_\_\_\_\_ gadgets

1 mark

- 7 Tim and Jemima both walk 12 kilometres.  
Tim takes 4 hours and 10 minutes.  
Jemima takes 270 minutes.  
Who takes the longest?

Tim

Jemima

How much longer?

\_\_\_\_\_

1 mark

1 mark

Circle how confident you feel with time.

1                      2                      3                      4                      5  
Not                      Very  
confident                      confident