

4 Complete the sentences.

a) 1 ten and 6 ones =

b) = 1 ten and 3 ones

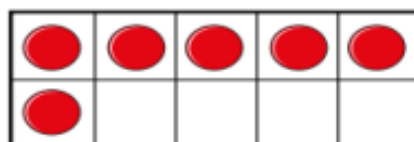
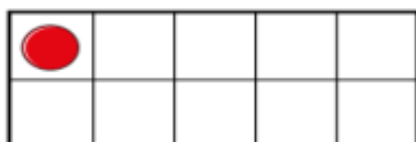
c) 15 = ten and ones

d) 2 tens =

e) 1 ten and 10 ones =

5 Is this true or false?

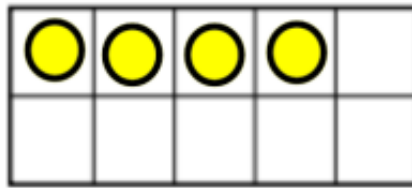
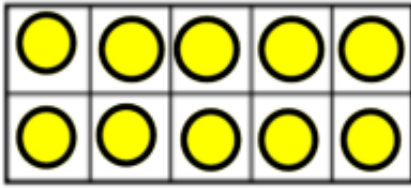
The ten frames show the number 16



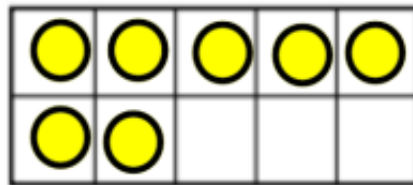
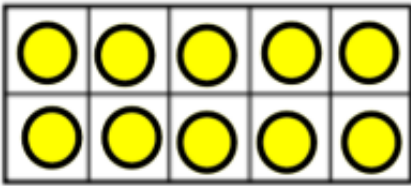
Explain your answer

Additional Questions

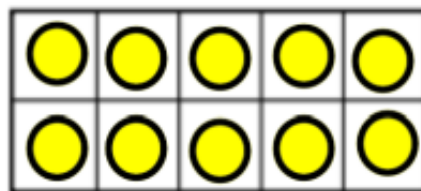
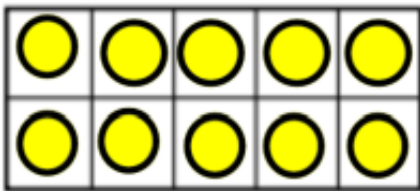
Complete the sentences



ten and ones is equal to



ten and ones is equal to



ten and ones is equal to



ten and ones is equal to