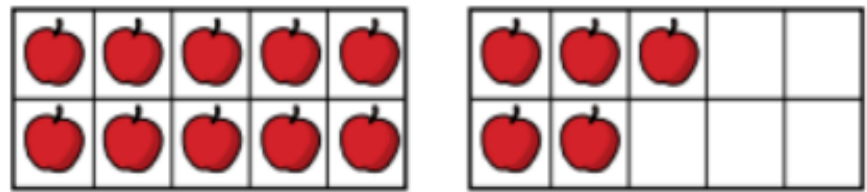


Tens and ones

1 a) How many apples are there?



There is ten and ones.

There are apples.

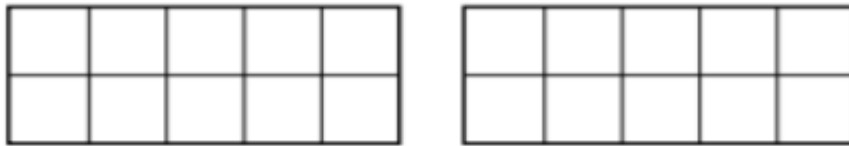
b) How many bees are there?



There is ten and ones.

There are bees.

- 2 Draw counters to show 1 ten and 3 ones.



1 ten and 3 ones is equal to

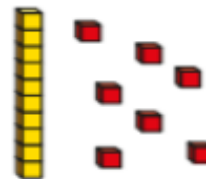


- 3 Match the number sentences to the pictures.

1 ten and 7 ones



1 ten and 1 one




1 ten and 8 ones



4 Complete the sentences.



Is the same as
____ten and ____ones.



Is the same as
____ten and ____ones.



Is the same as
____ten and ____ones.



Is the same as
____ten and ____ones.