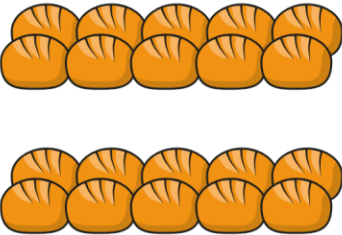
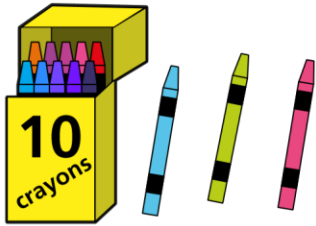
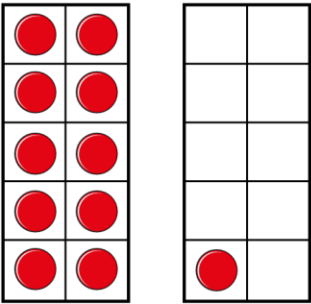




I Complete the table.

| Picture | Numeral | Word |
|---|---------|-----------|
|  | 20 | |
|  | | |
|  | | |
| | 12 | |
| | | seventeen |



2 Draw counters to show 14 in three different ways.

a)

| | | | | |
|--|--|--|--|--|
| | | | | |
| | | | | |

| | | | | |
|--|--|--|--|--|
| | | | | |
| | | | | |

b)

| | | | | |
|--|--|--|--|--|
| | | | | |
| | | | | |

| | | | | |
|--|--|--|--|--|
| | | | | |
| | | | | |

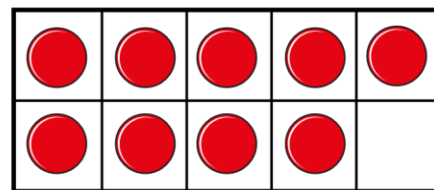
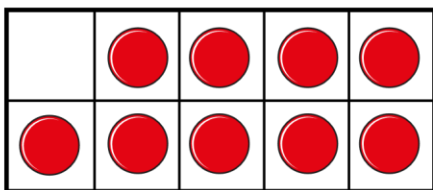
c)

| | | | | |
|--|--|--|--|--|
| | | | | |
| | | | | |

| | | | | |
|--|--|--|--|--|
| | | | | |
| | | | | |

3

I have made the number 19



Has Teddy made the number 19?

