

1.

Compare Number Sentences

Put the words in the gaps.

is greater than is less than is equal to

		$7 + 3$
$15 + 2$		
$8 + 7$		$17 - 2$

2.


Put the numbers in the gaps.

3 **6** **8**

$15 - 4 < 7 + \square$

$9 + 3 > 13 - \square$

$10 + 4 = 6 + \square$



3.

Compare Number Sentences

How many ways can you find?

0 1 2 3 4 5 6 7 8 9

$8 + 3 < 5 + \bigcirc$

$7 + 7 > 9 + \bigcirc$

$8 + 6 < 7 + \bigcirc$


$13 - 6 > 3 + \bigcirc$

4.

$9 + 3 = 4 + \bigcirc$


I can only put one number in.

Is Jusna right? Why?



5.

Compare Number Sentences




Put numbers in the gaps.

$$13 - 5 < \square + \square$$

$$17 - 7 > \square + \square$$

$$\square - \square = 11 + 6$$

$$20 - 9 < \square + \square$$


6.

Use the cards to make your own number statements.

3 5 9 10 12 13

$3 + 9$	$<$	$10 - 3$
	$<$	
	$>$	
	$=$	
	$>$	

Which was the hardest? Why?