


1 Which is the greater number in each pair?


a)



T	O

T	O


b)



T	O

T	O

c)



T	O

T	O

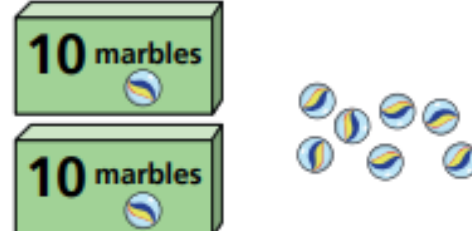
2 Mo and Kim each have some marbles.



Mo




Kim



a) How many marbles does Mo have?

b) How many marbles does Kim have?

c) Who has more marbles? _____

3. a. Write a number greater than 50

It has _____ tens and _____ ones

b. Write a number less than 90

It has _____ tens and _____ ones

c. Make a number greater than 80 but less than 100

It has _____ tens and _____ ones

4

Write **greater than** or **less than** to complete the sentences.

a) 72 is _____ 83

b) 100 is _____ 99

c) 65 is _____ 56