


1.

Numbers to 50

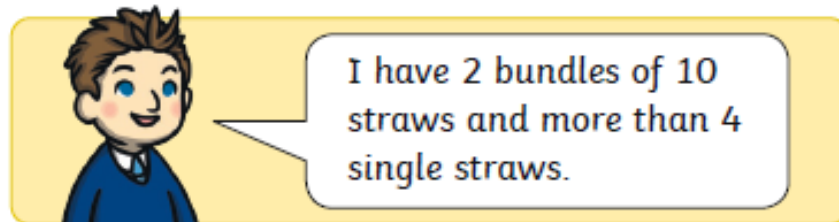


I have 34 straws.

Is he right? If not, can you tell him what mistake he has made?

2.

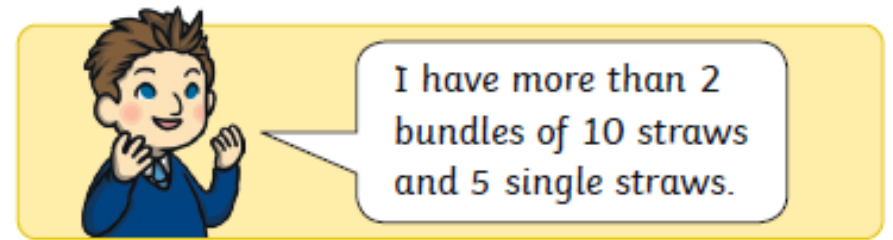
He counts out some more straws.



I have 2 bundles of 10 straws and more than 4 single straws.

What number of straws could he have counted?

3.



I have more than 2 bundles of 10 straws and 5 single straws.

Could he have 35 straws? How do you know?

4.

I used these cards to make a number less than 50 and greater than 20:



I made:

41

Make 5 more numbers less than 50 and greater than 20, using the cards.