

1.



Use the number track to

- count forwards from 35 to 49
- count back from 46 to 38


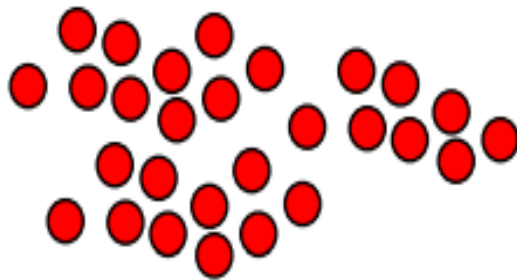


Can you count from ___ to ___ without a number track?

2.




These images both show the same number of counters. Which counters are easier to count? Why?



3.




How many muffins are there?



4.

Eva is counting from 38 to 24



Will she say the number 39?

Will she say the number 29?

Will she say the number 19?

Explain how you know.

5.

Ron and Whitney are counting.

Ron says:



43, 42, 41, 40, 41, 42

Whitney writes:

10 11 12 13 41 15



Can you spot their mistakes?

6.

Annie counts how many muffins she has.



I have 35 muffins.



Do you agree with Annie?

Explain your answer.