


1.

 There are 16 biscuits on a plate. Mo eats 5 of them.



Complete the sentences.

First there were ___ biscuits.


Then ___ were eaten.

Now there are ___ biscuits.

$16 - 5 = \underline{\quad}$

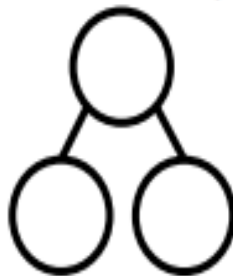
First	Then	Now
		

2.

 First there were 9 sheep. Then they all ran away.


How many sheep are left?


Use ten frames and counters to represent the sheep.



$\square - \square = \square$

3.

 Use the number pieces and the number line to complete the number sentences.



$20 - 7 = \underline{\quad}$



Use this method to calculate:

$20 - 8$

$18 - 6$

$19 - 4$