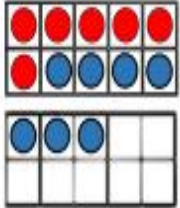
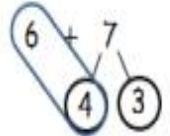



1.

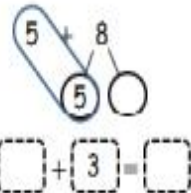
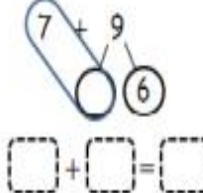
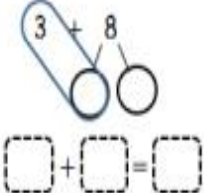
Rosie has used the 10 frames to calculate $6 + 7$



I partitioned the 7 into 4 and 3 so that I could make a full 10

Use Rosie's method to complete:

Mo has used a number line to calculate $6 + 8$



I partitioned 8 into 4 and 4 to make it easier.

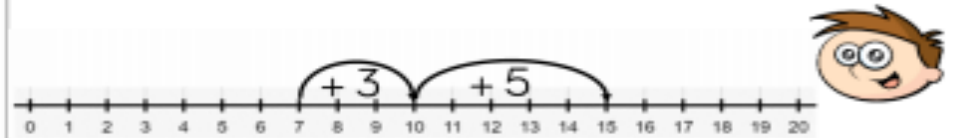
Use Mo's method to calculate:

$5 + 8 = \square$ $9 + 4 = \square$ $6 + 8 = \square$

2.

Teddy and Eva are adding together 7 and 8 using a number line.

Teddy shows it this way:



Eva shows it this way:



Who is correct?

Explain your answer.