
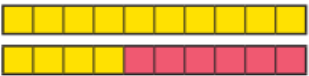


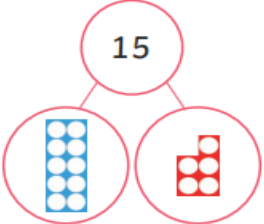
Extended Challenge 1

Find and Make Number Bonds 


What number bonds are shown by the pictures?



___ + ___ = ___
___ + ___ = ___



___ = ___ + ___
___ = ___ + ___



___ + ___ = ___
___ + ___ = ___

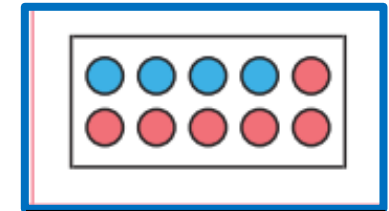
Extended Challenge 2

Following the pattern of the numbers, can you write all the number bonds to 14?

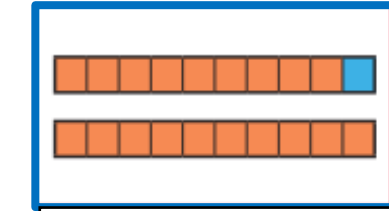
Extended Challenge 3

Write calculations to show these number bonds.

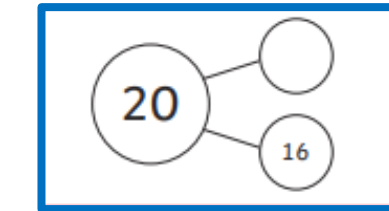
Bob has 20 bricks.
12 are red - the rest are yellow.



Bob has 10 pots of paint.
7 are black - the rest are white.



Bob has 10 buckets.
2 are black - the rest are yellow.



Can you see any number bonds that are similar? What's the same? What's different?

