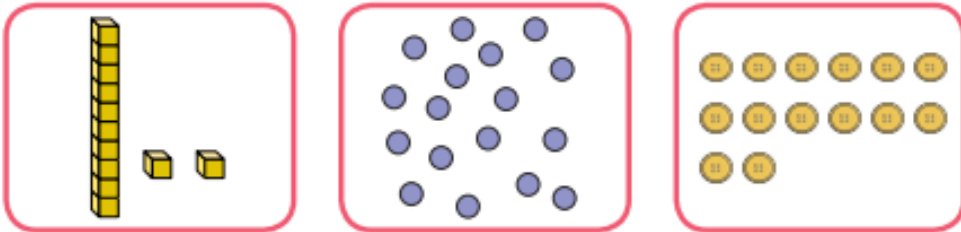
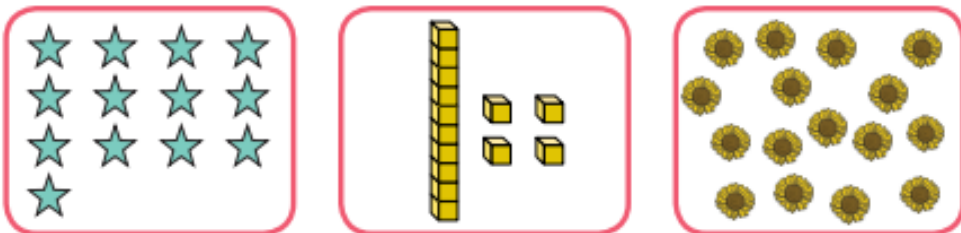


1. May has been ordering sets of objects. She has made a mistake. Draw a line to show which sets need to be swapped. One has been done.

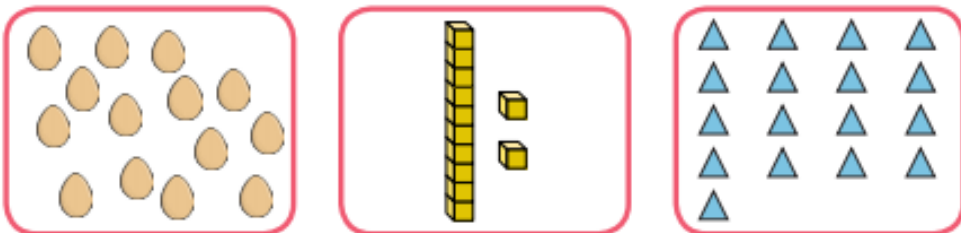
least to most:



A. most to least:

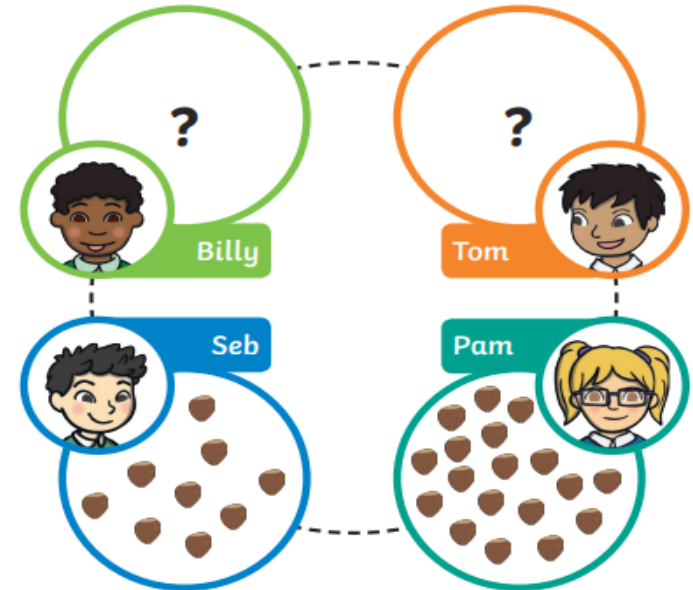


B. least to most:



2.

Four friends have been collecting conkers. Here is what they have collected:



Pam wrote their names in order from who collected the least to who collected the most.



A. Draw the arrows on the dotted lines to show the direction in which the children have collected the least to the most conkers.

B. How many conkers could Billy and Tom possibly have?

10	11	12	13	14	15	16	17	18	19	20
----	----	----	----	----	----	----	----	----	----	----

1st possible amount Tom _____ Billy _____

2nd possible amount Tom _____ Billy _____

3rd possible amount Tom _____ Billy _____

4th possible amount Tom _____ Billy _____