


# Tuesday 26<sup>th</sup> January Comparing Groups of Objects Challenges

## Challenge 1

How many books can go in the empty box?



Least




Most

Is there more than one possibility? Prove it.




Least



Most




Least



Most



Least



Most



Least



Most

Is it possible to have 3 or 7 books in the middle pile? \_\_\_\_\_

Explain your answer. \_\_\_\_\_

\_\_\_\_\_  
\_\_\_\_\_

## Challenge 2

Three children are eating strawberries.



Daisy



James



Erica




1.

Who has the most? \_\_\_\_\_

Who has the least? \_\_\_\_\_

2.

Move some strawberries, so that all the children have an equal amount. Draw them in the boxes below.



3.

If the group were given 1 more strawberry could they put them into equal groups? \_\_\_\_\_

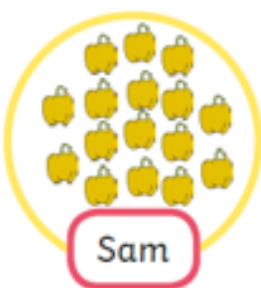
Explain your answer. \_\_\_\_\_

\_\_\_\_\_

\_\_\_\_\_

### Challenge 3

Mo, Sam and Lin have counted out some objects.



Who could be saying these sentences? There could be more than one answer!

The first one has been done for you. Write the name or names next to the speech bubble.

