

Subtraction – crossing 10 (1)

- 1 Rosie has 15 cakes.



Her friends eat 6 cakes.

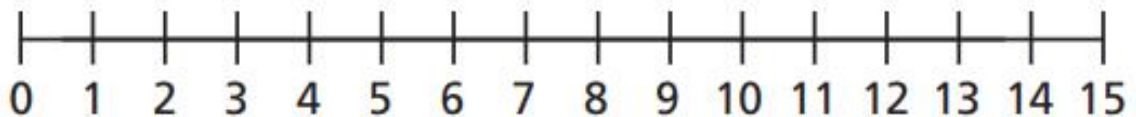
How many cakes does Rosie have left?



- 2 Jack has 13 stickers.

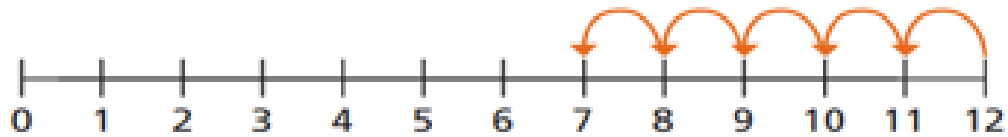
He gives 7 stickers to Dora.

How many stickers does Jack have left?

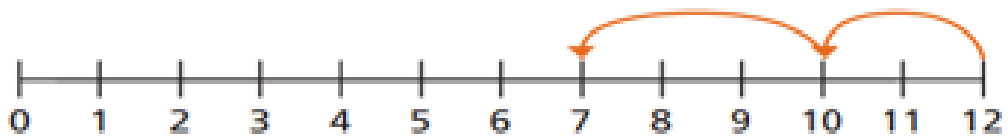


- 3 Ron and Eva have worked out $12 - 5$ on a number line.

Ron's method



Eva's method



- a) What is the same and what is different?



- b) Use Eva's method to work out the subtractions.

Use the number line to show your workings out.

$$12 - 6 = \underline{\quad\quad}$$

$$15 - 8 = \underline{\quad\quad}$$

$$14 - 9 = \underline{\quad\quad}$$

4 Fill in the missing numbers.

Use the number line to show your workings out.

$$14 - \square = 8$$



$$\square - 6 = 7$$

