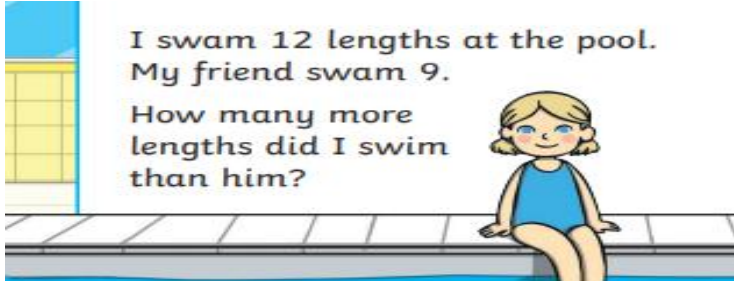
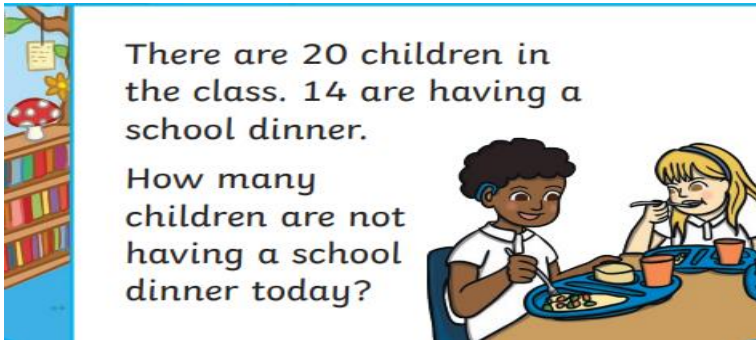
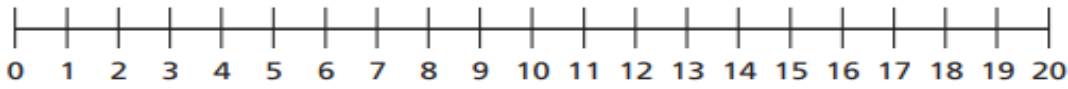


### Challenge 1

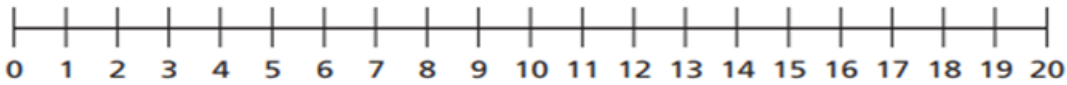
Use the number line to count back.  
Then write the subtraction number sentence to match the word problems.



I swam 12 lengths at the pool.  
My friend swam 9.  
How many more lengths did I swim than him?



There are 20 children in the class. 14 are having a school dinner.  
How many children are not having a school dinner today?



## Challenge 2

Zack had 20 grapes. He ate 15. Show this.



$$\underline{\quad\quad} - \underline{\quad\quad} = \underline{\quad\quad}$$



Of the 15 grapes Zack ate,  
7 were red and the rest were green.  
Show this.

$$\underline{\quad\quad} - \underline{\quad\quad} = \underline{\quad\quad}$$

