

1

Complete the additions.

$$\square + 5 = 9$$

$$\square + 2 = 9$$

$$8 + \square = 9$$

$$6 + \square = 9$$

2

Complete the additions.

$$\square + 5 = 19$$

$$\square + 2 = 19$$

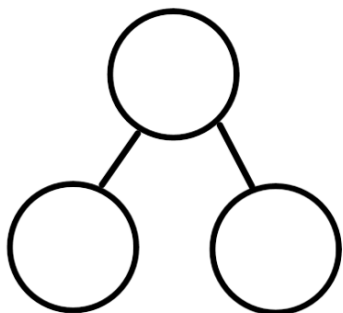
$$18 + \square = 19$$

$$16 + \square = 19$$

3

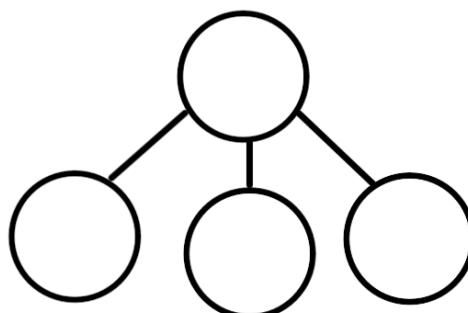
a)

$$5 + 2 = \underline{\quad}$$



$$\underline{\quad} \text{ ones} + \underline{\quad} \text{ ones} = \underline{\quad}$$

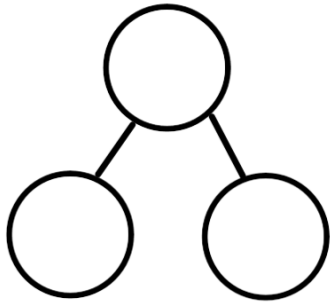
$$15 + 2 = \underline{\quad}$$



$$\underline{\quad} \text{ tens} + \underline{\quad} \text{ ones} + \underline{\quad} \text{ ones} = \underline{\quad}$$

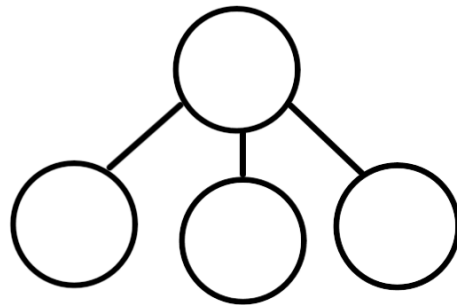
b)

$$6 + 2 = \underline{\quad}$$



$$\underline{\quad} \text{ ones} + \underline{\quad} \text{ ones} = \underline{\quad}$$

$$16 + 2 = \underline{\quad}$$



$$\underline{\quad} \text{ tens} + \underline{\quad} \text{ ones} + \underline{\quad} \text{ ones} = \underline{\quad}$$

4

Complete the following number bond family facts.

If

Then

a)

$$5 + 2 = \underline{\quad}$$

$$2 + 5 = \underline{\quad}$$

$$15 + 2 = \underline{\quad}$$

$$2 + 15 = \underline{\quad}$$

b)

$$6 + 2 = \underline{\quad}$$

$$\underline{\quad} + \underline{\quad} = \underline{\quad}$$

$$16 + 2 = \underline{\quad}$$

$$\underline{\quad} + \underline{\quad} = \underline{\quad}$$

c)

$$7 + 3 = \underline{\quad}$$

$$\underline{\quad} + \underline{\quad} = \underline{\quad}$$

$$17 + \underline{\quad} = \underline{\quad}$$

$$\underline{\quad} + \underline{\quad} = \underline{\quad}$$

